
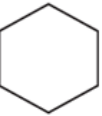









Properties of Geometric Figures



 A	 B	 C
 D	 E	 F
 G	 H	 I

Write the letter or letters that match each statement.

- These are polygons.

- These are regular polygons.

- These are quadrangles.

- These are concave.

- These are NOT parallelograms.

- These do NOT have any right angles or angles whose measures are larger than a right angle.

Try This

- Take a paper clip and two pencils. Create a homemade compass. You may not bend or break the paper clip. How many different size circles can you make with it? _____

Practice

- $30 + 50 =$ _____
- $40 + 60 =$ _____
- $250 + 140 =$ _____
- $80 - 20 =$ _____
- $120 - 70 =$ _____
- $460 - 230 =$ _____