


STUDY LINK
7•10

What Is the ONE?



For Problems 1 and 2, use your Geometry Template or sketch the shapes.


1. Suppose  is $\frac{1}{4}$. Draw each of the following:


Example: $\frac{3}{4}$

a. 1

b. $1\frac{1}{2}$

c. 2



2. Suppose  is $\frac{2}{3}$. Draw each of the following:

a. $\frac{1}{3}$

b. 1

c. $\frac{4}{3}$

d. 2

Use counters to solve the following problems.

3. If 14 counters are $\frac{1}{2}$, then what is the ONE?

_____ counters

4. If 9 counters are $\frac{1}{3}$, then what is the ONE?

_____ counters

5. If 12 counters are $\frac{2}{5}$, then what is the ONE? _____ counters

6. If 16 counters are $\frac{4}{9}$, then what is the ONE? _____ counters

Practice

7. _____ = $\frac{1}{4} + \frac{1}{2}$

8. $\frac{1}{3} + \frac{1}{6} =$ _____

9. $\frac{3}{4} - \frac{1}{4} =$ _____

10. _____ = $\frac{5}{6} - \frac{1}{3}$