

STUDY LINK
7•6

Many Names for Fractions



Write the letters of the pictures that represent each fraction.

1. $\frac{1}{2}$ C, _____

2. $\frac{3}{4}$ _____

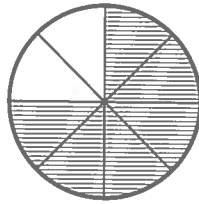
3. $\frac{4}{5}$ _____

4. $\frac{2}{3}$ _____

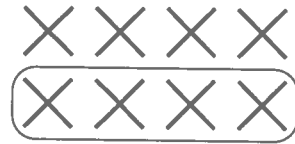
A




B



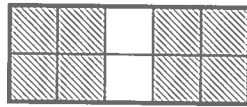
C



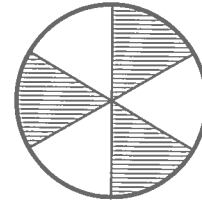
D




E



F



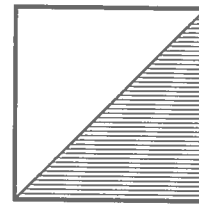
G



H



I



Practice

5. _____ = $\frac{1}{6} + \frac{3}{6}$

6. $\frac{2}{4} + \frac{1}{4} =$ _____

7. $\frac{1}{2} + \frac{2}{6} =$ _____

8. $\frac{5}{6} - \frac{2}{6} =$ _____

9. $\frac{3}{4} - \frac{1}{4} =$ _____

10. $\frac{1}{3} - \frac{1}{6} =$ _____