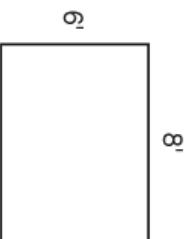


Areas of Rectangles



Find the area of each rectangle.

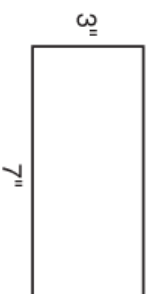
1.



Number model: _____

Area = _____ square feet

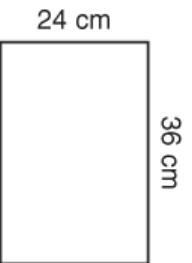
2.



Number model: _____

Area = _____ square inches


3.



Number model: _____

Area = _____ square centimeters

4.



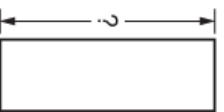
Number model: _____

Area = _____ square meters

Try This

The area of each rectangle is given. Find the missing length.

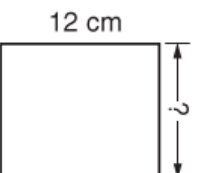
5.



Area = 27 in²

height = _____ in.

6.



Area = 120 cm²

base = _____ cm

Practice

7. 3, 6, _____, 12, _____, _____

8. 14, 21, _____, _____, 42, _____

9. 30, _____, 42, 48, _____, _____

10. 12, _____, 36, _____, 60, _____