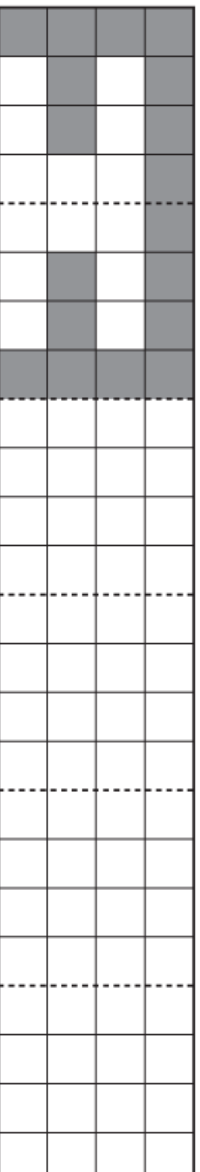


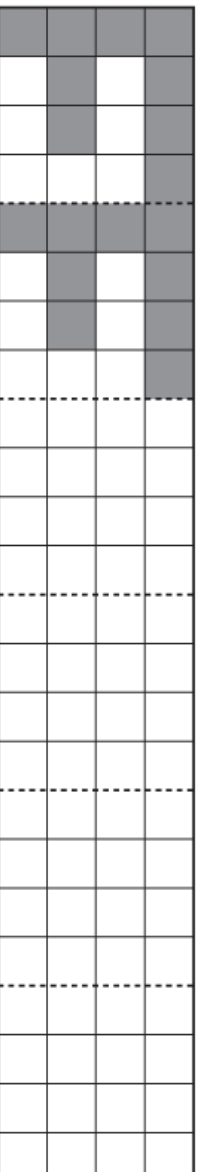
**Geometric Patterns**

1. Continue each pattern. Then tell if you continued the pattern by using a reflection, rotation, or translation of the original design.

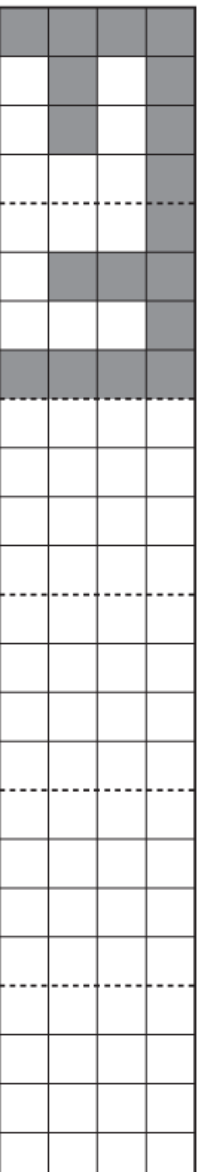
a. \_\_\_\_\_



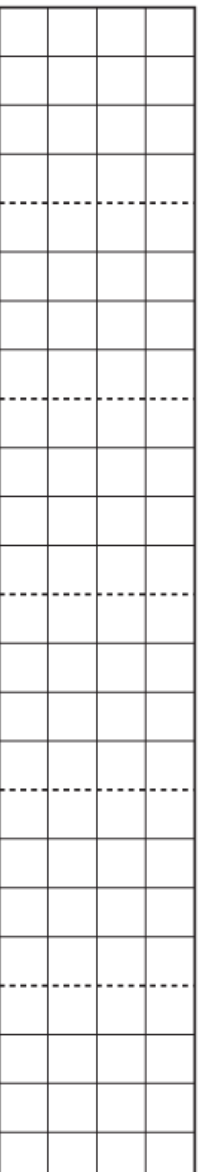
b. \_\_\_\_\_



c. \_\_\_\_\_



2. Make up your own pattern.

**Practice**

3. 50% of \$25.00 = \_\_\_\_\_      4. 25% of \$10.00 = \_\_\_\_\_  
 5. \_\_\_\_\_ = 40% of \$150.00      6. \_\_\_\_\_ = 20% of \$250.00