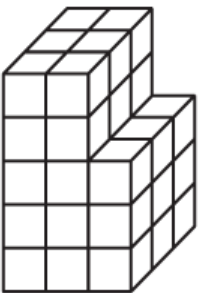


Volume

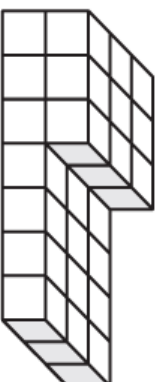


1. Find the volume of each stack of centimeter cubes.

a.

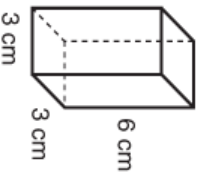
Volume = _____ cm^3

b.

Volume = _____ cm^3

2. Calculate the volume of each rectangular prism.

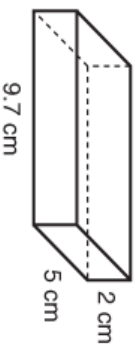
a.



Number model: _____

Volume = _____ cm^3

b.

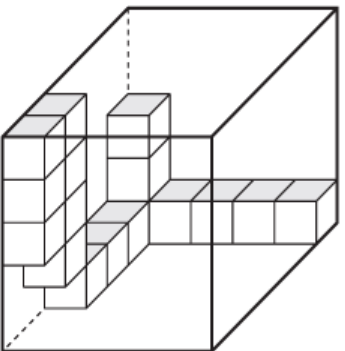


Number model: _____

Volume = _____ cm^3

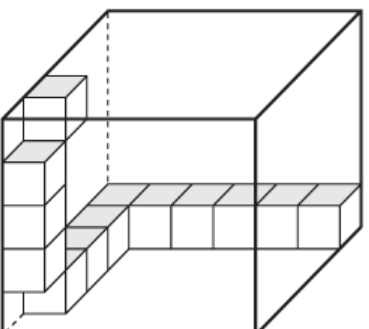
3. What is the total number of cubes needed to completely fill each box?

a.



_____ cubes

b.



_____ cubes

Practice

4. $-65 + 16 =$ _____

5. _____ $= -21 + (-19)$

6. _____ $= 84 + (-55)$

7. $-16 + 89 =$ _____