



Name _____

Date _____



Time _____






STUDY LINK
2·5

Collecting Data



The tally chart at the right shows the number of books that some students read over the summer. Use the information to answer the questions below.

Number of Books Reported 	Number of Students 
2	///
3	////
4	
5	//// //
6	////
7	//
8	////

- How many students reported the number of books they read? _____ 
- What is the **maximum** (the largest number of books reported)? _____ 
- What is the **minimum** (the smallest number of books reported)? _____ 
- What is the **range**? _____ 
- What is the **mode** (the most frequent number of books reported)? _____ 

Practice

7. $30 + 50 =$ _____

8. _____ $= 70 + 70 + 70$

9. _____ $= 90 + 80 + 60$

10. $100 + 40 + 70 =$ _____