

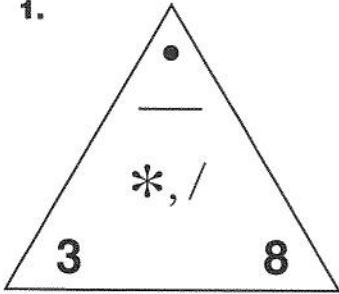
STUDY LINK
3•3

Fact Triangles

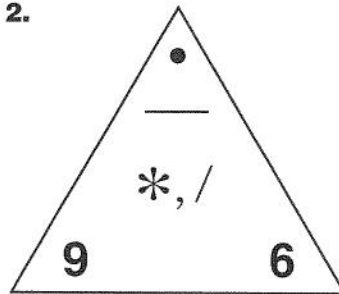


Complete these Multiplication/Division Fact Triangles.

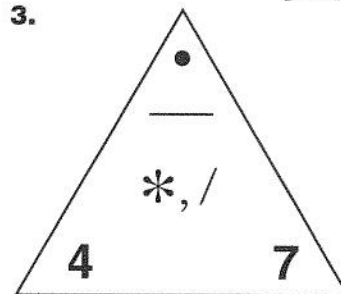
1.



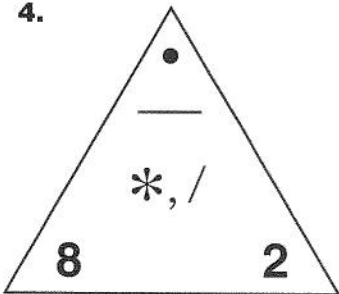
2.



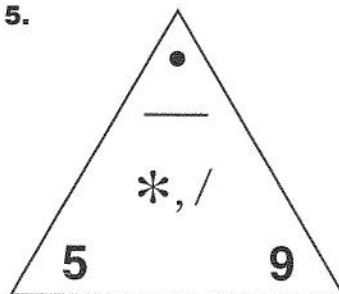
3.



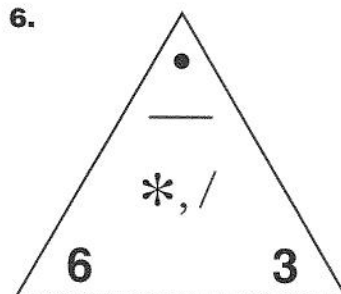
4.



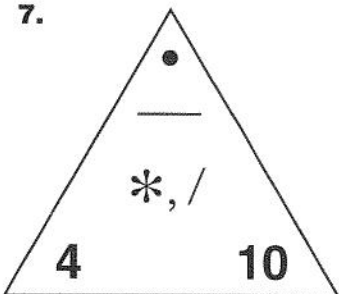
5.



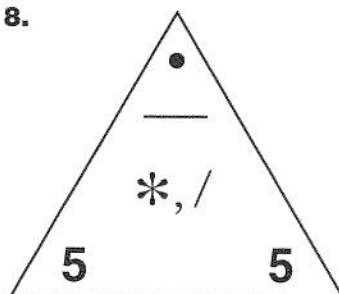
6.



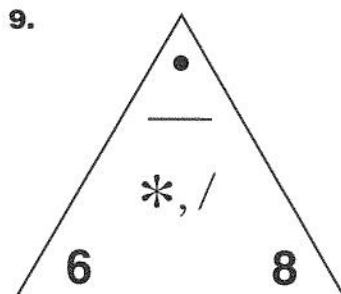
7.



8.



9.



Practice

10. Name 4 multiples of 7. _____, _____, _____, _____

11. List all the factors of 18. _____

12. Name the product of 9 and 6. _____

13. List all the factor pairs of 20.

_____ and _____, _____ and _____, _____ and _____