

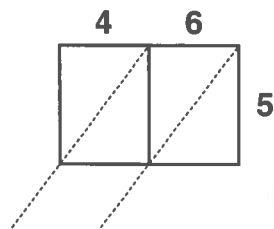
STUDY LINK
5•7

Lattice Multiplication

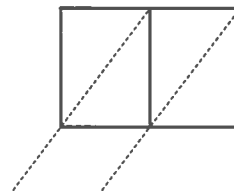


Use the lattice method to find the following products.

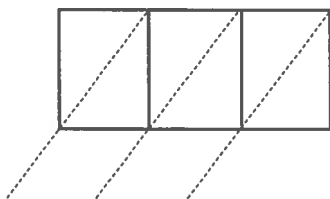
1. $5 * 46 =$ _____



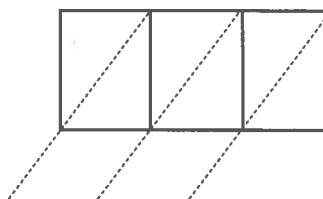
2. $8 * 67 =$ _____



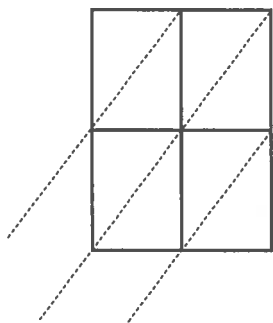
3. $7 * 836 =$ _____



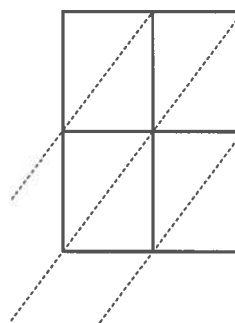
4. $4 * 329 =$ _____



5. $25 * 31 =$ _____



6. $49 * 52 =$ _____



7. Use the lattice method and the partial-products method to find the product.

$84 * 78 =$ _____

Practice

8. _____ = $33.67 + 5.9$

9. $68.4 + 5.82 =$ _____

10. $71.44 - 37.67 =$ _____

11. _____ = $101.06 - 29.91$